

ROTEIRO DE ESTUDOS/ATIVIDADES

UME "Prof. Florestan Fernandes".
ANO: 5º A- COMPONENTE CURRICULAR: Integrado
PROFESSORA: Cecília
PERÍODO DE 17/08/2020 ATÉ 28/08/2020


LÍNGUA PORTUGUESA

VERBOS


VERBOS SÃO PALAVRAS QUE INDICAM AÇÃO, FENÔMENOS DA NATUREZA OU ESTADO.

RECORTE AS FICHAS E COMPLETE AS FRASES COM OS VERBOS.


O CACHORRO _____.



O SAPO _____.



O PEIXE _____.



A BORBOLETA _____.



PULA	LATE	NADA	VOA
------	------	------	-----

RECORTE AS FICHAS DE VERBOS E COLE NA COLUNA CERTA, OBSERVANDO A CONJUGAÇÃO .



1ª CONJUGAÇÃO: TERMINADOS EM **AR**

2ª CONJUGAÇÃO: TERMINADOS EM **ER**

3ª CONJUGAÇÃO: TERMINADOS EM **IR**

MULTIPLICAÇÃO



$$2+2+2+2+2= \square$$

$$2 \times 5= \square$$



$$4+4+4+4= \square$$

$$4 \times 4= \square$$



$$3+3+3+3+3+3= \square$$


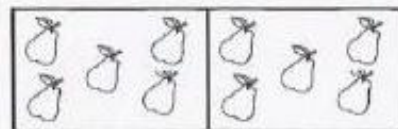
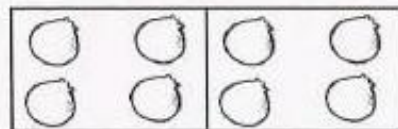

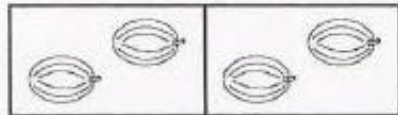
$$6 \times 3= \square$$



$$6+6= \square$$

$$2 \times 6= \square$$

CONTE PARA COMPLETAR A TRABUADA:



$2 \times 1 = \square$

$2 \times 2 = \square$

$2 \times 3 = \square$

$2 \times 4 = \square$

$2 \times 5 = \square$

$2 \times 6 = \square$

$2 \times 7 = \square$

$2 \times 8 = \square$

$2 \times 9 = \square$

$2 \times 10 = \square$

MEIOS DE TRANSPORTE

LIGUE




BARCO



BICICLETA



METRÔ



CARRO



SKATE

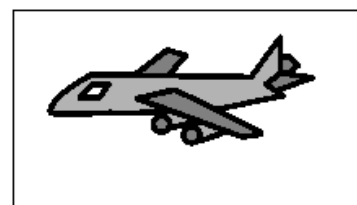

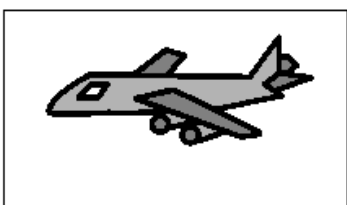




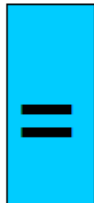

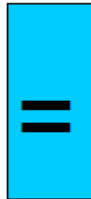
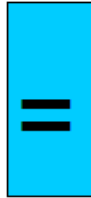
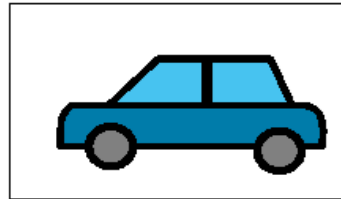

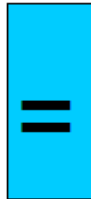
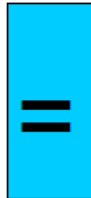
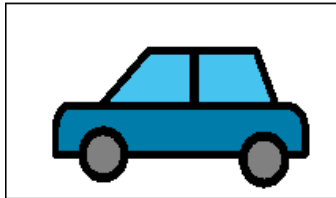


FOGUETE



HELICÓPTERO

COLOQUE AS FIGURAS IGUAIS AO SEU LADO:





MÁRIO QUER ANDAR SOBRE A ÁGUA!
QUAL TRANSPORTE ELE TERÁ QUE PEGAR?
CIRCULE.

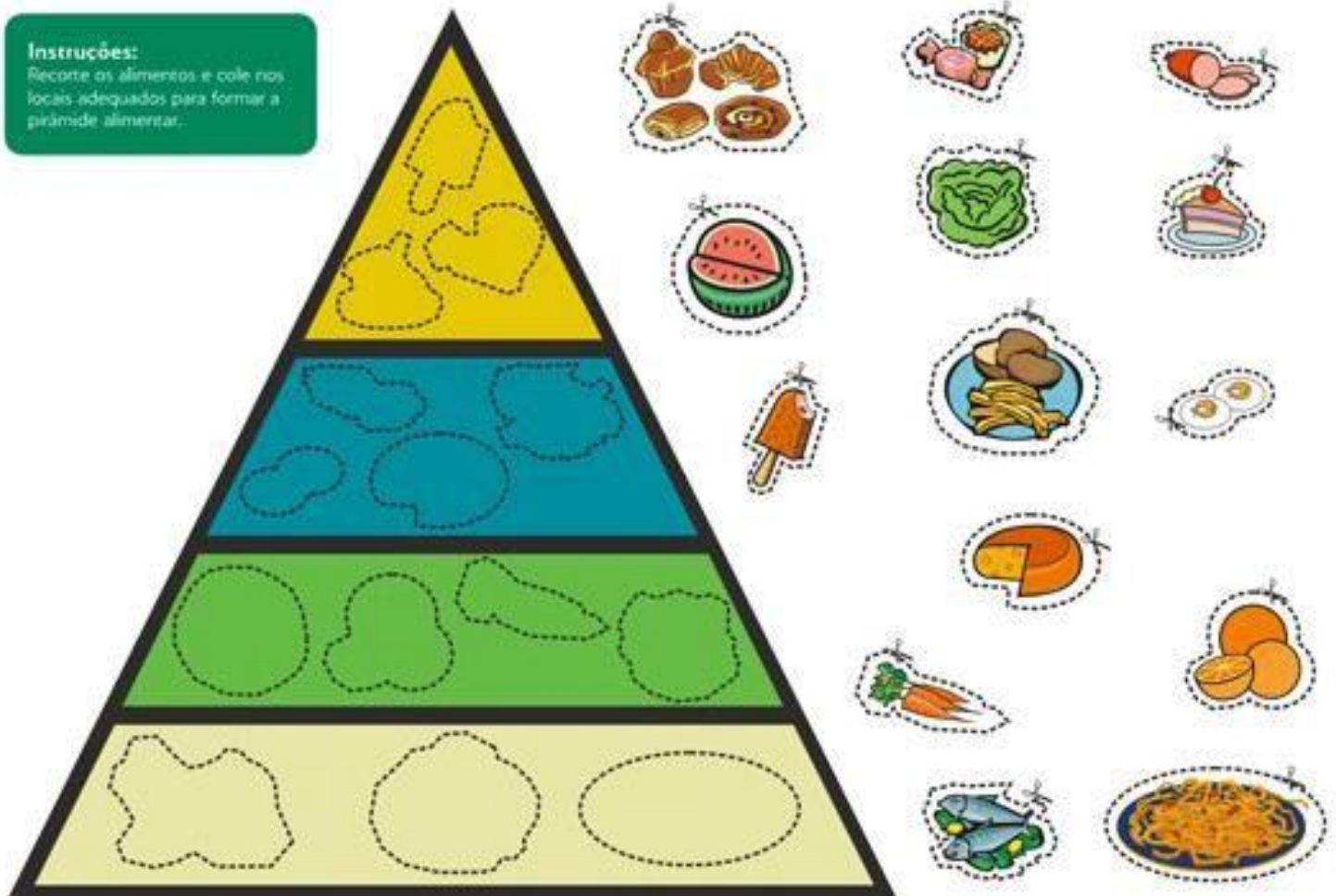


CIÊNCIAS

PIRÂMIDE ALIMENTAR

ALGUNS GRUPOS DE ALIMENTOS DEVEMOS COMER EM MAIORES QUANTIDADES E OUTROS EM MENORES QUANTIDADES. A PIRÂMIDE ALIMENTAR SERVE PARA NOS ORIENTAR NESSE SENTIDO.

RECORTE OS ALIMENTOS , OBSERVANDO OS PONTILHADOS. OBSERVE OS FORMATOS PARA ENCAIXAR NA PIRÂMIDE ALIMENTAR.



AS FRUTAS

DITADO RECORTADO



Empty dashed rectangular box for labeling the orange.

Empty dashed rectangular box for labeling the lemon.

Empty dashed rectangular box for labeling the watermelon slice.



Empty dashed rectangular box for labeling the strawberry.

Empty dashed rectangular box for labeling the papaya.

Empty dashed rectangular box for labeling the lemon slices.



Empty dashed rectangular box for labeling the apple.

Empty dashed rectangular box for labeling the peach.

Empty dashed rectangular box for labeling the pear.

notebookdapref.blogspot.com








02

PÊSSEGO	MARACUJÁ	MAMÃO
MELANCIA	PERA	MORANGO
LARANJA	LIMÃO	MAÇÃ

HISTÓRIA

FOLCLORE

ESCREVA OS NOMES DOS PERSONAGENS DE LENDAS FOLCLÓRICAS.

	M U L A - S E M - C A B E Ç A
	L O B I S O M E M
	C U R U P I R A
	B O I T A T Á
	B O T O
	S A C I
	I A R A

